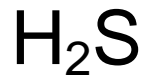
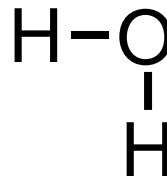
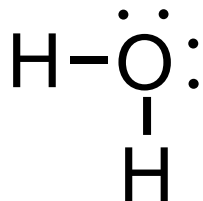
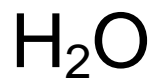


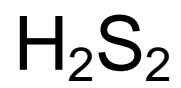
Physical Science
Covalent Bonding Worksheet 1

Name: _____ Block: ____

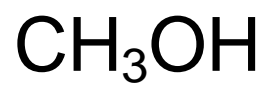
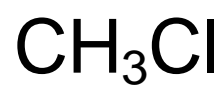
Draw a Lewis Structure showing unpaired electrons, and the Structural Formula for each chemical formula. The first is done as an example.



Over →



Level 1:



*The way this is written is a clue...
It's not CH₄O!*



Warning: tricky!