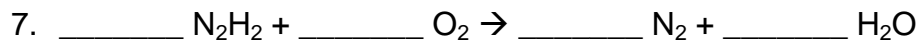
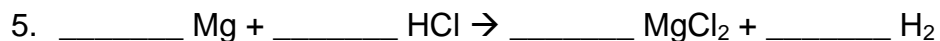


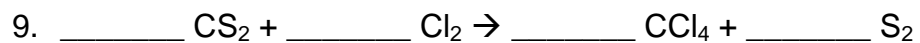



Physical Science
Balancing Chemical Equations #2

Name: _____ Block: ____

Use the steps you used on *Balancing Chemical Equations #1* to balance the equations below. This time you are responsible for determining what elements are present and therefore need to be counted. Show all of your work to receive credit. Please use pencil.





Level 1 Credit:

